




# Rechnen mit Cent



1 Was ist mehr? Kreuze an.



2 <, > oder =?

- |               |               |               |               |
|---------------|---------------|---------------|---------------|
| 3 ct ○ 5 ct   | 12 ct ○ 12 ct | 6 ct ○ 12 ct  | 13 ct ○ 17 ct |
| 9 ct ○ 9 ct   | 7 ct ○ 5 ct   | 2 ct ○ 1 ct   | 20 ct ○ 20 ct |
| 14 ct ○ 20 ct | 1 ct ○ 10 ct  | 16 ct ○ 15 ct | 4 ct ○ 14 ct  |
| 7 ct ○ 17 ct  | 6 ct ○ 0 ct   | 3 ct ○ 3 ct   | 18 ct ○ 14 ct |

3

